


NAME: _____




Activity One

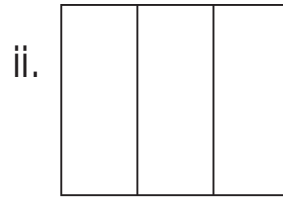
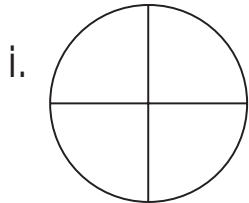


a) What time does the clock show?

Answer: _____

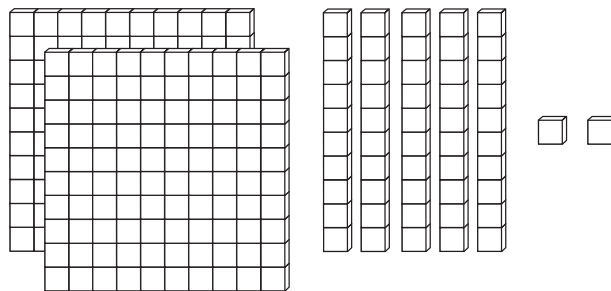


b) Which figure shows fourths?



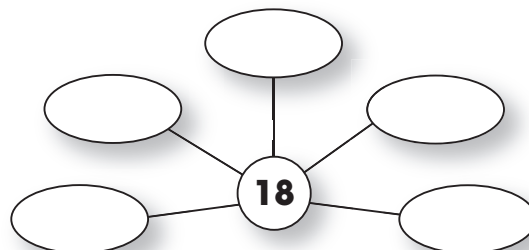
c) Add: + = _____

d) In the following model each = 1.



What number does this model show? _____

e) In the boxes below, put facts that add up to 18.





Activity Two

a) Write the missing numbers.

17			20					
----	--	--	----	--	--	--	--	--

b) Add the following:

	Add 6	
i)	6	
ii)	7	
iii)	8	
iv)	9	

	Add 11	
v)	13	
vi)	15	
vii)	17	
viii)	19	

c) How much money is this?

Answer: _____



d) The number 73 has _____ tens and _____ ones.

e) Which words make this statement true?

87 _____ 88

i. is equal to

ii. is less than

iii. is greater than

f) Write a plus (+) or a minus (-) sign in the square to make the number sentence true.

i) $12 \square 4 = 8$

ii) $7 \square 9 = 16$

iii) $20 \square 10 = 10$

NAME: _____



Activity Three


a) Is 75 an even or odd number? **Answer:** _____

b) Fill in the numbers from 1 to 100 in the hundreds chart below.

		3							
				15					
21									
								40	
						47			
	52								
					66				
			84						
							98		

c) What is 84 rounded to the nearest ten? _____

d) Fill in the missing numbers on the line below.



e) What is the ninth letter in the following message?

Little Miss Muffet sat on a tuffet. **Answer:** _____

f) Write the following as a number:

i) 4 hundreds + 9 tens + 0 ones = _____

ii) 6 hundreds + 8 tens + 3 ones = _____



Activity Four

<p>a) How do you make 10?</p> <p>i. $7 + 3$ <input type="checkbox"/></p> <p>ii. $6 + 4$ <input type="checkbox"/></p> <p>iii. $2 + 7$ <input type="checkbox"/></p> <p>iv. $4 + 4$ <input type="checkbox"/></p>	<p>b) How do you make 14?</p> <p>i. $9 + 4$ <input type="checkbox"/></p> <p>ii. $7 + 7$ <input type="checkbox"/></p> <p>iii. $8 + 6$ <input type="checkbox"/></p> <p>iv. $9 + 5$ <input type="checkbox"/></p>	<p>c) How do you make 8?</p> <p>i. $7 + 2$ <input type="checkbox"/></p> <p>ii. $8 + 0$ <input type="checkbox"/></p> <p>iii. $9 + 1$ <input type="checkbox"/></p> <p>iv. $6 + 2$ <input type="checkbox"/></p>
--	--	---

d) What even number comes right after:

- i) 12 _____ ii) 14 _____ iii) 7 _____ iv) 0 _____

e) Count forward by 100's.

→ → → →

f) Add down and across.

i)

4	6	
0	8	

ii)

9	3	
5	5	

g) There are 8 bulldogs and 14 terriers in the Shady Hollow Kennels. How many dogs are in the kennels?



Activity Five

a) Write the missing numbers by skip-counting by 2's.

	44			50				
--	----	--	--	----	--	--	--	--

b) What is the place value of the underlined digits?

i) 890 = _____ ii) 443 = _____

c) Put the following numbers in order from greatest to smallest.

56 23 6 113 89

d) What number makes the equation true?

i) $12 + \square = 18$

ii) $13 - \square = 9$

iii) $31 + \square = 35$

iv) $20 - \square = 10$

e) Subtract the following.

i) $\begin{array}{r} 44 \\ -9 \\ \hline \end{array}$

ii) $\begin{array}{r} 26 \\ -12 \\ \hline \end{array}$

iii) $\begin{array}{r} 19 \\ -3 \\ \hline \end{array}$

iv) $\begin{array}{r} 56 \\ -42 \\ \hline \end{array}$



Activity Six

a) Circle the largest number in each bubble.

76
79

112
121

54
45


b) What fraction of the shape is shaded in? Answer: _____



c) Counting up from 13, which number comes next? _____

d) What number does this represent? $\frac{\quad}{\quad} =$

e) Count the candy?



Fill in the missing numbers: tens ones.

f) Write the related addition fact for the following:

i) $15 + 7 = 22$ _____

ii) $12 + 9 = 21$ _____

1.

a) 3 o'clock

b) i.

c) 7

d) 252

e) Five of: 1 + 17,
2 + 16, 3 + 15, etc.

1A

2.

a) 17, 18, 19, 20,
21, 22, 23, 24, 25

b)

- i) 12 v) 24
- ii) 13 vi) 26
- iii) 14 vii) 28
- iv) 15 viii) 30

c) \$1.22

d) 7 tens, 3 ones

e) ii.

f) i) - ii) + iii) -

2A

3.

a) Odd

b)

1	2	3	4	5	6	7	8	9	10
11	12	13	14	15	16	17	18	19	20
21	22	23	24	25	26	27	28	29	30
31	32	33	34	35	36	37	38	39	40
41	42	43	44	45	46	47	48	49	50
51	52	53	54	55	56	57	58	59	60
61	62	63	64	65	66	67	68	69	70
71	72	73	74	75	76	77	78	79	80
81	82	83	84	85	86	87	88	89	90
91	92	93	94	95	96	97	98	99	100

c) 80

d) 0 - 1 - 2 - 3 - 4 -
5 - 6 - 7 - 8 - 9 - 10

e) s

f) i) 490 ii) 683

3A

4.

a) i. 7 + 3,
ii. 6 + 4

b) ii. 7 + 7,
iii. 8 + 6,
iv. 9 + 5

c) ii. 8 + 0,
iv. 6 + 2

d) i) 14 ii) 16
iii) 8 iv) 2

e) 700 - 800 - 900 -
1000 - 1100

f)

4	6	10
0	8	8
4	14	18

i)

ii)

9	3	12
5	5	10
14	8	22

g) 22

4A

5.

a) $42 - 44 - 46 - 48 -$
 $50 - 52 - 54 - 56 -$
58

b) i) tens ii) hundreds

c) 113, 89, 56, 23, 6

d) i) 6 ii) 4
iii) 4 iv) 10

e) i) 35 ii) 14
iii) 16 iv) 14

5A

6.

a) $79 - 121 - 54$

b) $1/6$

c) 14

d) 5

e) 2 tens, 4 ones

f) i) $7 + 15 = 22$
ii) $9 + 12 = 21$

6A



(these answers are for the 6 free bonus pages, see page 3 for download instructions)