

Perimeter and Area



Measure the following lengths for each shape below using a ruler, then find the perimeter and area of each shape.

i)



Perimeter = _____

Area = _____

ii)



Perimeter = _____

Area = _____


iii)



Perimeter = _____

Area = _____

iv)



Perimeter = _____

Area = _____


v)



Perimeter = _____

Area = _____


vi)



Perimeter = _____

Area = _____

vii)



Perimeter = _____

Area = _____

viii)



Perimeter = _____

Area = _____

Temperature



a) What temperatures are shown below?

i)



_____ °F/°C

ii)



_____ °F/°C

iii)



_____ °F/°C

iv)




_____ °F/°C

v)



_____ °F/°C

vi)



_____ °F/°C

vii)



_____ °F/°C

viii)



_____ °F/°C

ix)



_____ °F/°C

x)



_____ °F/°C

xi)



_____ °F/°C

xii)



_____ °F/°C

xiii)



_____ °F/°C

xiv)



_____ °F/°C

xv)



_____ °F/°C

Time



What time does each clock show below?

i)



ii)



iii)



iv)



v)



vi)



vii)



viii)



ix)



x)



xi)



xii)



xiii)



xiv)



xv)

