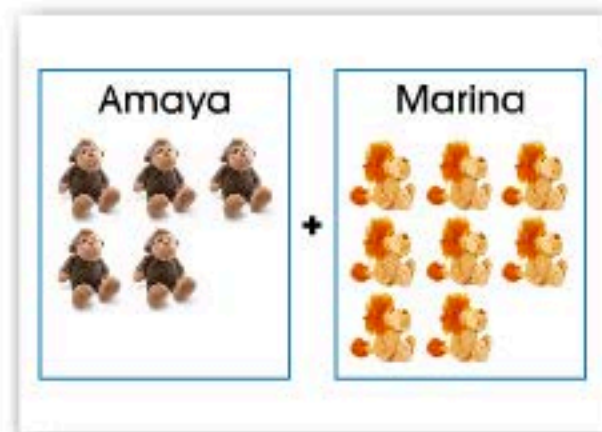




- 1
- 2
- 3
- 4
- 5
- 6
- 7
- 8

Amaya and her sister, Marina, both collect stuffed animals and decide to put their collections together. The image on the right shows their two collections. How many total stuffed animals do the two girls have?



(touch the image to enlarge)

stuffed animals

Touch for Solution

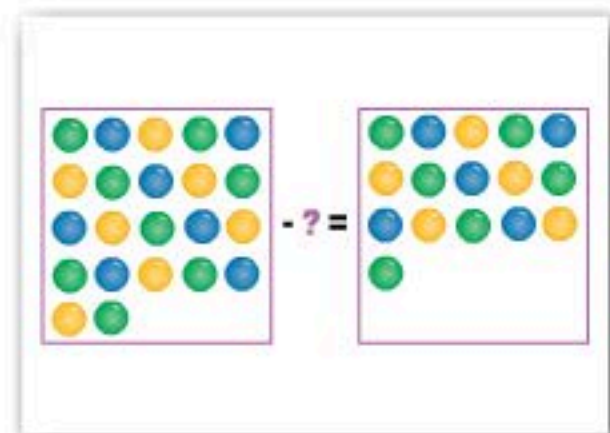
- 1
- 2
- 3
- 4
- 5
- 6
- 7
- 8
- 9
- 0

Reset





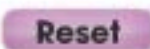
Fernando has 22 marbles. He gives some of his marbles to his sister and is left with 16 marbles for himself. How many marbles did Fernando give away?



(touch the image to enlarge)

marbles

Touch for Solution





- 1
- 2
- 3
- 4
- 5
- 6
- 7
- 8

Jared and Aaron are putting their money together to buy a skateboard. The image on the right shows the amount of money both boys have saved. What is the total amount of money Jared and Aaron have?



(touch the image to enlarge)

\$.

Touch for Solution

- 1
- 2
- 3
- 4
- 5
- 6
- 7
- 8
- 9
- 0

Reset

-
-
-
-
-
-
-
-

