

Geometry Board Game

END



Instructions

Close X

Be the first team to reach the end of the jungle trail.

- Separate your class into two teams.
- Name your team if you have access to a keyboard by touching the “playing piece” icon in the legend. Use a maximum of 10 letters and spaces. Press enter to lock in your name.
- Start the game by touching the “START” icon in the bottom left corner.
- Answer the questions on the screen to move ahead on the board.
- Use the Reset button to start the game over.
- Use the Mix button to shuffle the questions around.

START

Mix

Reset



Geometry Board Game


END

Pablo

What two shapes are used to make the picture below?

- a) square and triangle
- b) rectangle and triangle
- c) square and rectangle



 Pablo

 Pepe



START

Mix

Reset



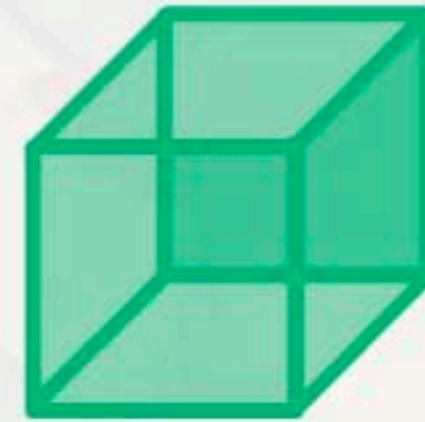
Geometry Board Game

END


Pepe

What is the name of the figure below?


- a) cube
- b) sphere
- c) rectangular prism



Pablo



Pepe



START

Mix

Reset

