




Identify the following pairs of shapes as similar or congruent.



**CONGRUENT**

**SIMILAR**







ES

1

2

3

Identify the following pairs of shapes as similar or congruent.



**CONGRUENT**

**SIMILAR**



3/6



Reset



Identify the following pairs of shapes as similar or congruent.



**CONGRUENT**



**SIMILAR**



5/6

