



ES

1

2

3

4

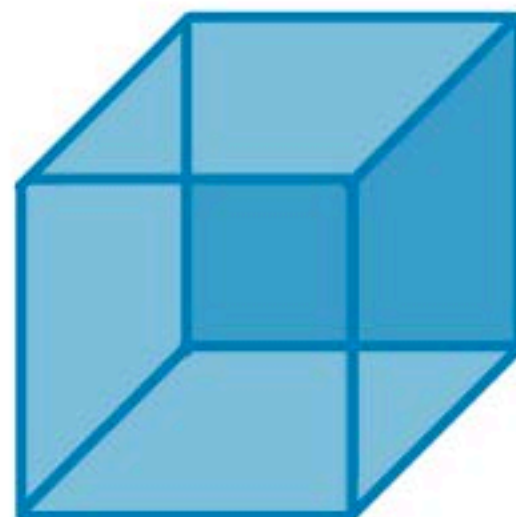
5

6

7

8

**Describe the shape to the right by its parts.**



**faces**



**sides**



**corners**

The cube has 6 square faces,  
12 sides and 8 corners.

**1 2 3 4 5 6 7 8 9 0**

Reset





ES

1

2

3

4

5

6

7

8

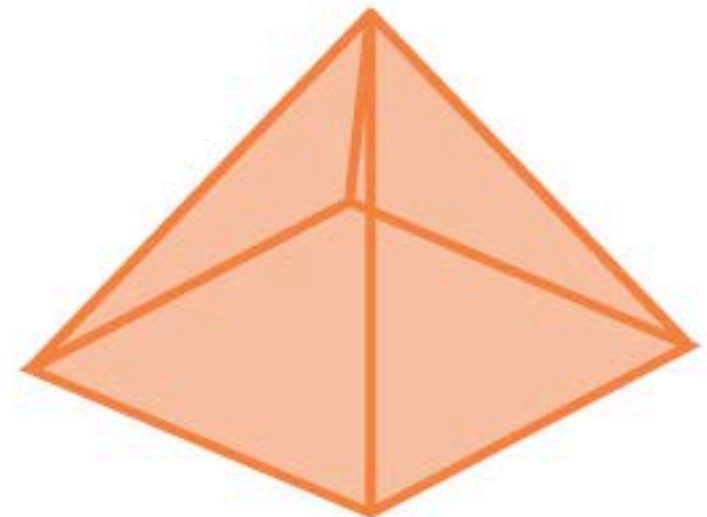
**What 2-D shapes do you see in the pyramid?  
Choose 2**

**square**

**circle**

**rectangle**

**triangle**



**Touch for Solution**





ES



Count the number of  
**WELL DONE!**  
shape to the right.




0

sides



0

corners



The circle has no sides and no corners.

1 2 3 4 5 6 7 8 9 0

Reset

