



How many faces, sides and corners do the following figures have?

1 2 3



faces
 sides
 corners



1/6



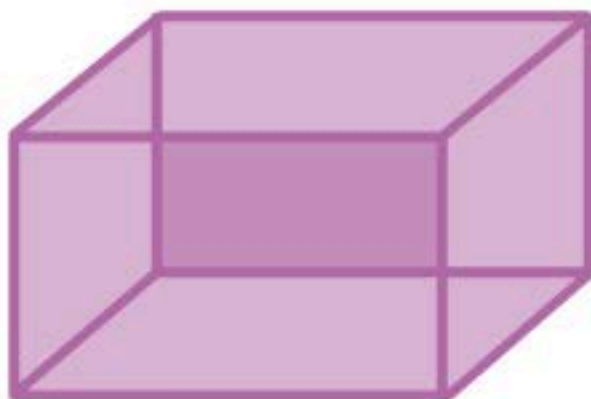
1 2 3 4 5 6 7 8 9 0

Reset



1 2 3

How many faces, sides and corners do the following figures have?



faces



sides



corners



2/6



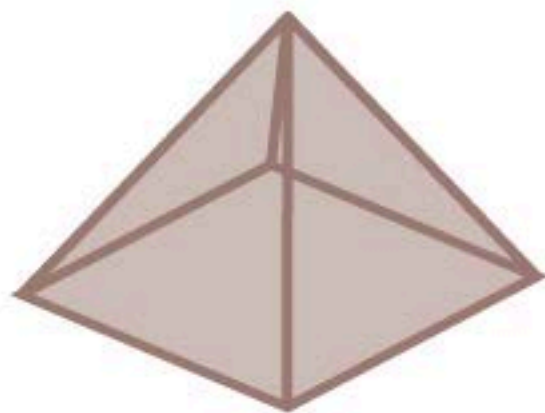
1 2 3 4 5 6 7 8 9 0

Reset






How many faces, sides and corners do the following figures have?



- faces
- sides
- corners


6/6


1 2 3 4 5 6 7 8 9 0

Reset

