




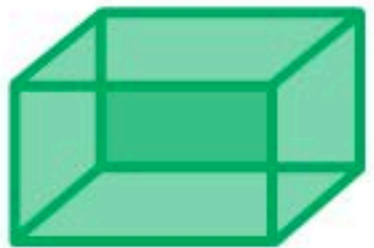
# Decomposing Geometric Shapes



**3-D figures** have **sides**, **corners** and **faces**. The faces are the flat shapes that make up the figure. Touch the 3-D figures below to see the number of sides, corners and faces they have.



cube



rectangular prism



pyramid



sphere





ES

1

2

3

4

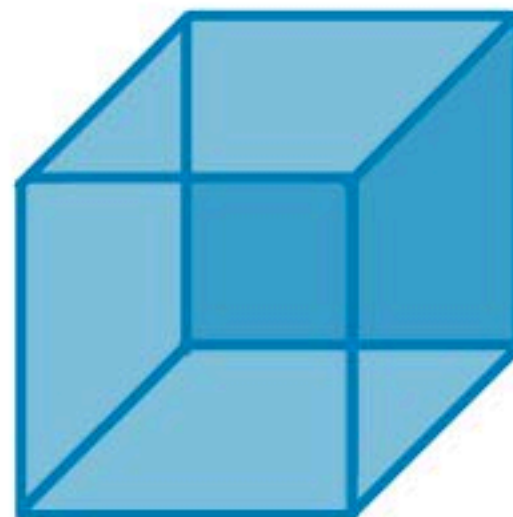
5

6

7

8

## Describe the shape to the right by its parts.



**faces**



**sides**



**corners**

Touch for Solution

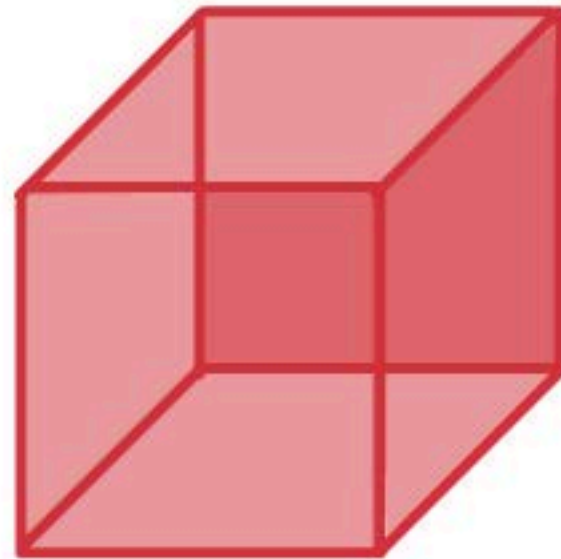
1 2 3 4 5 6 7 8 9 0

Reset





Which 2-D shapes were used to make the following 3-D shapes?



1/6

