


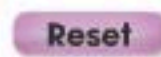


Use the provided paper clip to measure the book on the right. What is the length of the book in paper clips?

Book = paper clips long



Touch for Solution





- 1
- 2
- 3
- 4
- 5
- 6
- 7
- 8

Which unit would you use to measure the height of a giraffe?



(touch the image to enlarge)

feet

inches

Touch for Solution




Imperial

Metric

Reset



Using the **ruler tool** ,
measure the length of
the box in the picture
to the right.



inches

Use the ruler tool to measure the length
of the box. The box is 2 inches long.