



ES

1

2

3

4

5

6

7

8

**Ellie ate lunch at 12:00
p.m. It took her 30 minutes.
What time was it when Ellie
finished eating?**



(touch the image to enlarge)

: p.m.

12:00 p.m. + 30 minutes = 12:30 p.m.

1 2 3 4 5 6 7 8 9 0

Reset





ES

1

2

3

4

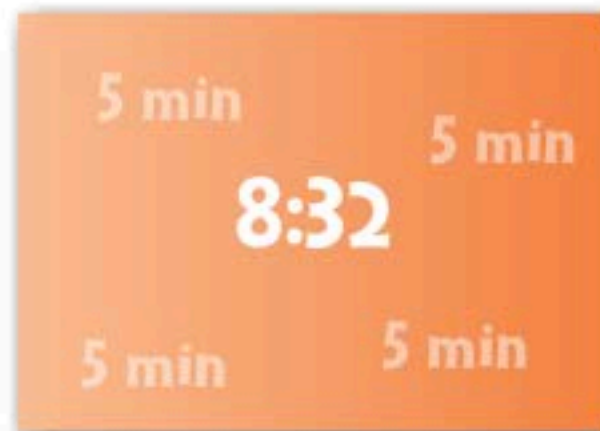
5

6

7

8

Diana is learning about five minute intervals. She is given the time 8:32. What is the time to the next five minute interval?




(touch the image to enlarge)

Touch for Solution

1 2 3 4 5 6 7 8 9 0


Reset





- 1
- 2
- 3
- 4
- 5
- 6
- 7
- 8

Chase is learning about five minute intervals. He is shown the clock to the right. What time does the clock show, and what is the time to the next five minute interval?



The time on the clock is 11:11.
The next five minutes to 11:11 is 11:15.

1 2 3 4 5 6 7 8 9 0

Reset