




What temperatures do the following thermometers show in Fahrenheit or Celsius?



°C



1/6


1 2 3 4 5 6 7 8 9 0

Reset






What temperatures do the following thermometers show in Fahrenheit or Celsius?



-   °C




3/6

1 2 3 4 5 6 7 8 9 0

Reset



**What temperatures do the following thermometers show in Fahrenheit or Celsius?**



**30 °F**



**4/6**



**1 2 3 4 5 6 7 8 9 0**

Reset