



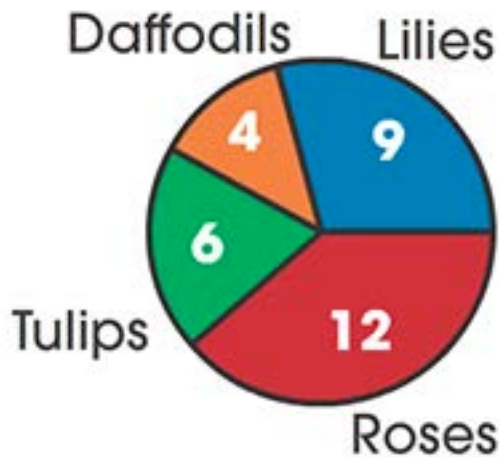
ES

1

2

3

Look at the following circle graph, then answer the following questions.



Which flower is growing the most?



roses

lilies

tulips

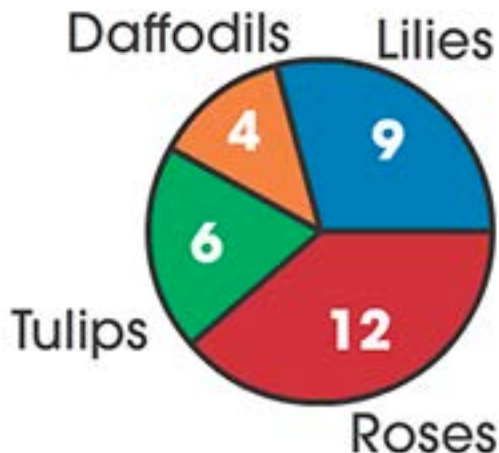


1/6






Look at the following circle graph, then answer the following questions.



How many more roses are there than tulips?

more



1 2 3 4 5 6 7 8 9 0



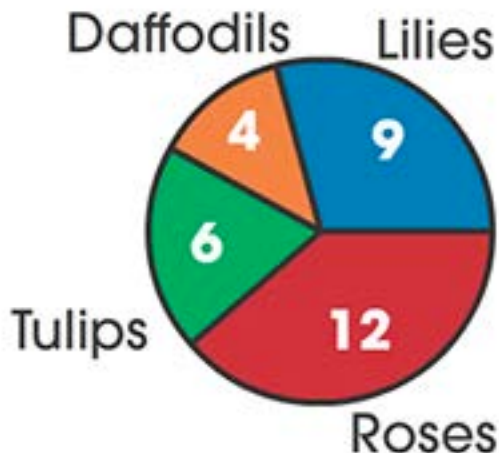
ES

1

2

3

Look at the following circle graph, then answer the following questions.



How many more lilies are there than daffodils?



5/6

**5** more

1 2 3 4 5 6 7 8 9 0

Reset