




Look at the following pictograph, then answer the following questions.



a) How many votes did red get?

b) Which color was voted for the most?
 red blue green

c) How many votes did blue get?

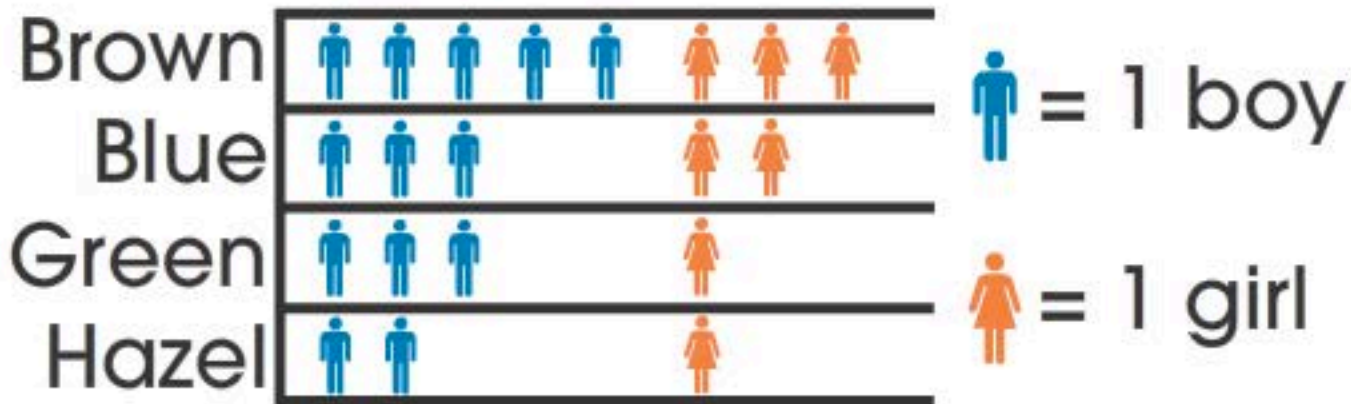
1 2 3 4 5 6 7 8 9 0

Reset





Look at the following pictograph, then answer the following questions.



- a) How many boys are there?
- b) How many girls are there?
- c) How many students have green eyes?

1 2 3 4 5 6 7 8 9 0






Pictographs can be used to describe and compare data. For example, look at the pictograph and then answer the following questions.


Animals on a Farm

 = 2 animals

Chickens



Pigs



Sheep



Which animal is there the least of?

Sheep

How many chickens are on the farm?

 touch