



What is the name of the following 3-D figures?



sphere

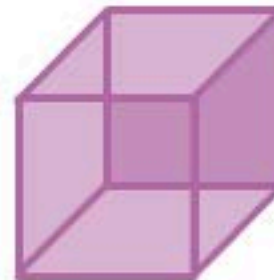


cylinder



square pyramid

d)



square pyramid

cylinder

sphere

cube

triangular prism

Reset




ES




1 2 3 4 5 6 7 8

How many sides are used in the following 2-D shapes?



Square

sides



Oval

sides



Triangle

sides

Touch for Solution

1 2 3 4 5 6 7 8 9 0

Reset



ES



Identify the following 2-D shapes and 3-D figures.



- circle
- oval
- octagon



1/10

