

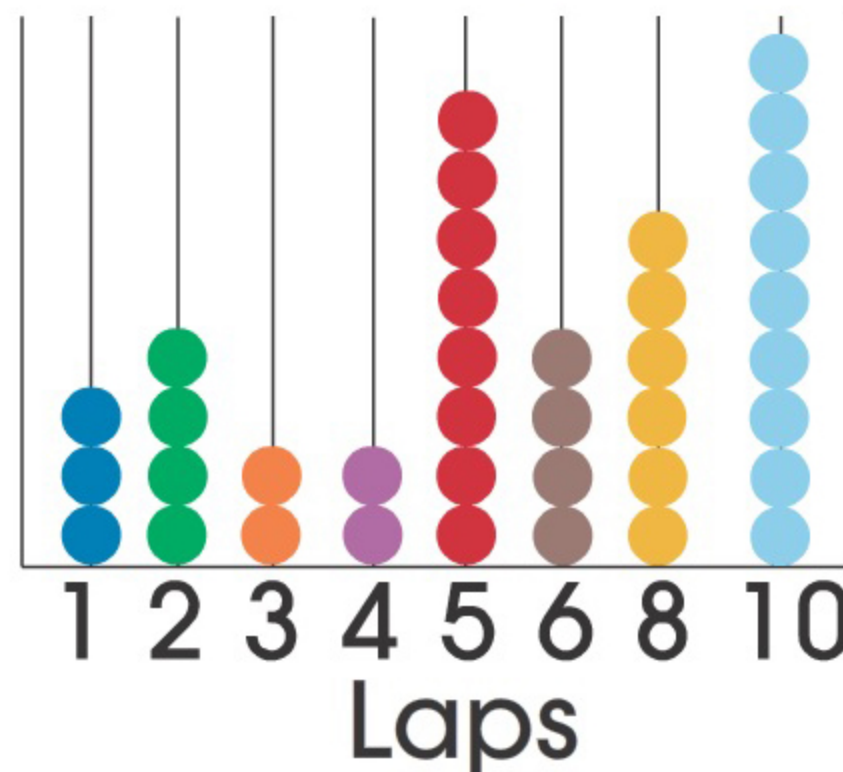
ES



The line plot to the right shows the number of laps students ran during warm-up for gym class.



Laps During Gym



a) What was the most number of laps run?  laps

b) How many students ran 8 laps?  students

Touch for Solution

1 2 3 4 5 6 7 8 9 0

Reset





The line graph to the right shows how much money the bake sale at Eli's school raised over the past few years. In which year did they raise:

- a) the least?
- b) the most?

Year

Year



Bake Sale



- a) The line graph shows they raised the least in year 1.
- b) The line graph shows they raised the most in year 6.





Learn the Skill



# Data Analysis & Probability Line Plots & Line Graphs

Menu

Contents



ES

# WELL DONE!

Students ran during

## warm-up for gym class.

How many more students

✓ a) ran 10 laps than 6 laps?

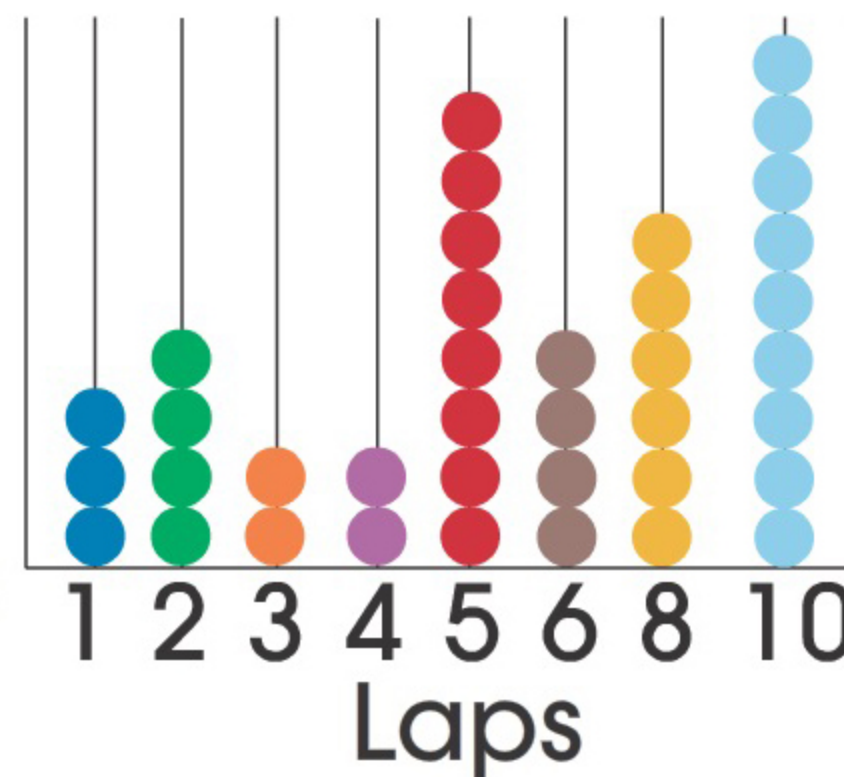
**5** more students

✓ b) 8 students ran how many laps?

**5** laps

1 2 3 4 5 6 7 8


## Laps During Gym



Touch for Solution

1 2 3 4 5 6 7 8 9 0

Reset



PULL