

Number & Operations Board Game

END

John

Subtract the following whole numbers:

$$17 - 9$$

- a) 8
- b) 6
- c) 9



John

Jan

A card for player John featuring a red and blue parrot. A card for player Jan featuring a brown monkey.



Calculator interface showing the number 17 in the display. The keypad includes buttons for +/-, sqrt, pi, C, 7, 8, 9, /, 4, 5, 6, x, 1, 2, 3, -, 0, ., =, +.



START

Mix

Reset



Algebra Board Game

END

Joe

How would you show the following pattern using letters:

a) ABA

b) ABB

c) AAB



Joe

Jen

A card with a white background and a green border. It features a red parrot on the left and the name 'Joe' in green text to its right. Below the parrot is a brown monkey on the left and the name 'Jen' in green text to its right.

START

Mix

Reset



Geometry Board Game


END


Pablo

What two shapes are used to make the picture below?

- a) square and triangle
- b) rectangle and triangle
- c) square and rectangle



 Pablo

 Pepe



START

Mix

Reset



Measurement Board Game

END

Jim

Convert the following measurement using the formula 1 foot = 12 inches:

$$3 \text{ feet} = \underline{\quad} \text{ inches}$$

- a) 48 inches
- b) 24 inches
- c) 36 inches

00:35



1 3

Jim

Pam



START

Mix

Reset




Data Analysis & Probability Board Game

END

Sarah

Using the pictograph, which pie flavor did the students have the least of?

- a) apple
- b) cream
- c) pumpkin

 = 1 student



 Sarah

 Raf



START

Mix

Reset

