


# Electrostatic and Magnetic Force

**Electrostatic**

**Magnetic**




## Instructions

Close X

Find the **electrostatic forces** and the **magnetic forces** by dragging the correct word to its matching image.

(label)

(label)



(label)

(label)

(label)

(label)




Reset

# Electrostatic and Magnetic Force

**Electrostatic**

**Magnetic**



**Electrostatic**

**Electrostatic**

**Magnetic**

**Electrostatic**



**(label)**

**(label)**

**(label)**

**(label)**



Reset

# Electrostatic and Magnetic Force

# WELL DONE!



**Electrostatic**



**Electrostatic**




**Magnetic**



**Electrostatic**



**Magnetic**



**Magnetic**



**Magnetic**



**Electrostatic**



Reset