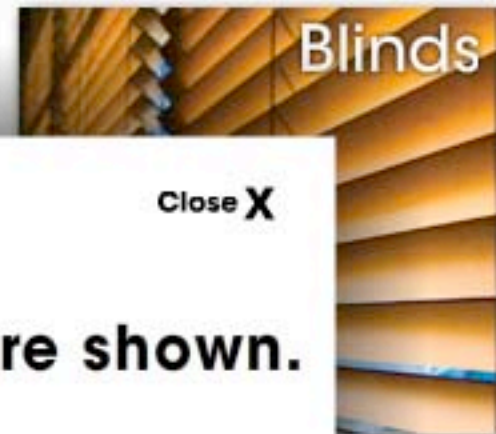
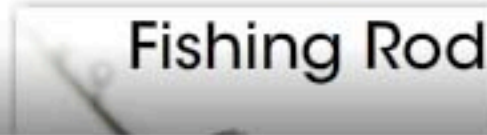



Finding the Wheel & Axle and Pulleys



Instructions


Close X

Eight wheel & axle, and pulley machines are shown.

Find the objects that use both simple machines:

- Wheel & Axle
- Pulley

Touch the image to see if you are correct.



Reset

Finding the Wheel & Axle and Pulleys



Finding the Wheel & Axle and Pulleys

WELL DONE!

