





Learn The Skill

Learn the Skill  Algebra
Ordering & Grouping

ES  Put the following pictures  in order from smallest to largest.



A **B** **C** **D**


SMALLEST **B** **D** **C** LARGEST



Touch for Solution

A


Reset


Practice The Skill

Practice the Skill  Algebra
Number Sentences & Fact Families

ES  Are the following number sentences true or false? 

$9 + 3 + 3 = 6 + 1 + 7$


TRUE FALSE 



Reset

Extension Activity: Memory Match

Algebra Memory Match Game

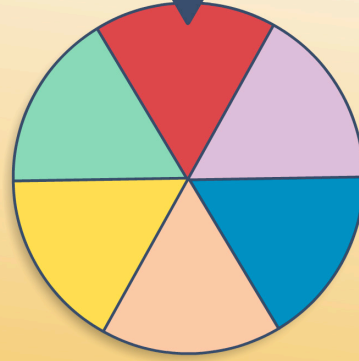
?	2 _ 4	?	
ABB	<	?	?

Mix Reset ?

Extension Activity: Spinner Game

Algebra Spinner Game

00:37 $\frac{3}{6}$



What number is missing in the following number chart?

12		14	15	16
----	--	----	----	----

a) 11
b) 13
c) 10

Mix Reset ?