





# Pre-Assessment

Pre-Assessment Measurement Temperature & Currency

ES How much money is pictured below? 1 2

a)  \$0.25 \$0.35 \$0.30

b)  \$  ? 5

c)  \$0.25 \$0.27 \$0.22




Reset

# Teach The Skill

Teach the Skill Measurement Area & Volume

ES **Volume** is a way to measure how much a container can hold. If you want to know how much juice a glass can hold, you need to find the volume. A glass, a tablespoon, and a pitcher of orange juice are shown below. See how many tablespoons of orange juice will fill the glass.


0 tablespoons

touch →   

Reset

## Extension Activity: Memory Match

Measurement Memory Match Game

	cold	?	?
?	32°F (0°C) =	?	3:30

Mix Reset ?

## Extension Activity: Spinner Game

Measurement Spinner Game

00:28  $\frac{3}{6}$

A rectangle has a side length of 6 units and a side width of 2 units. What is the area of the rectangle?

a) 16 square units  
b) 12 square units  
c) 32 square units

Mix Reset ?