





Pre-Assessment


Pre-Assessment  Algebra Patterns

ES **How would you show the following pattern using letters?** 1 2

 **ABA** **AAB** **ABB**


 **ABA** **AAB** **ABB**

c)  **ABA** **AAB** **ABB**


d)  **ABA** **AAB** **ABB**

Reset

Learn The Skill

Practice the Skill  Algebra Equations - Solving for a Variable

ES **Solve for "x" for the following equations.** 1 2 3

 $16 + x = 24$

$x = \square$

2/10

1 2 3 4 5 6 7 8 9 0

Reset

Extension Activity: Board Game

Algebra Board Game

TEAM A

How would you show the following pattern using letters?

a) ABA 

b) AAB

c) ABB

TEAM A

TEAM B

START

END

Mix Reset ?

Extension Activity: Spinner Game

Algebra Spinner Game

00:13 $\frac{1}{10}$

Solve for x for the following equation:

$$9x + 3 = 23 - 2$$

a) 2

b) 6

c) 3

Mix Reset ?