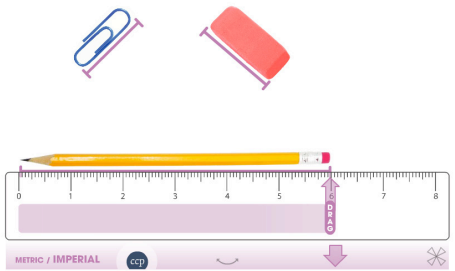



# Learn The Skill


Learn the Skill  Measurement Lengths & Weights

1 2 3 4 5 6 7 8






METRIC / IMPERIAL  


# Practice The Skill

Practice the Skill  Measurement Temperature & Time

ES What times do the following clocks show? 1 2 3



✓ 1/10  

1 2 3 4 5 6 7 8 9 0 

## Extension Activity: Memory Match

Measurement Memory Match Game

?	?	half past six =	12 inches =
?	1 foot	?	?
?	6:30	?	?

Mix Reset ?



## Extension Activity: Board Game


Measurement Board Game


TEAM B

What is the perimeter of a triangle with side lengths of 12 units?

a) 36 units  
b) 48 units  
c) 72 units

START  

TEAM A 

TEAM B 

Mix Reset ?