

Table of Contents

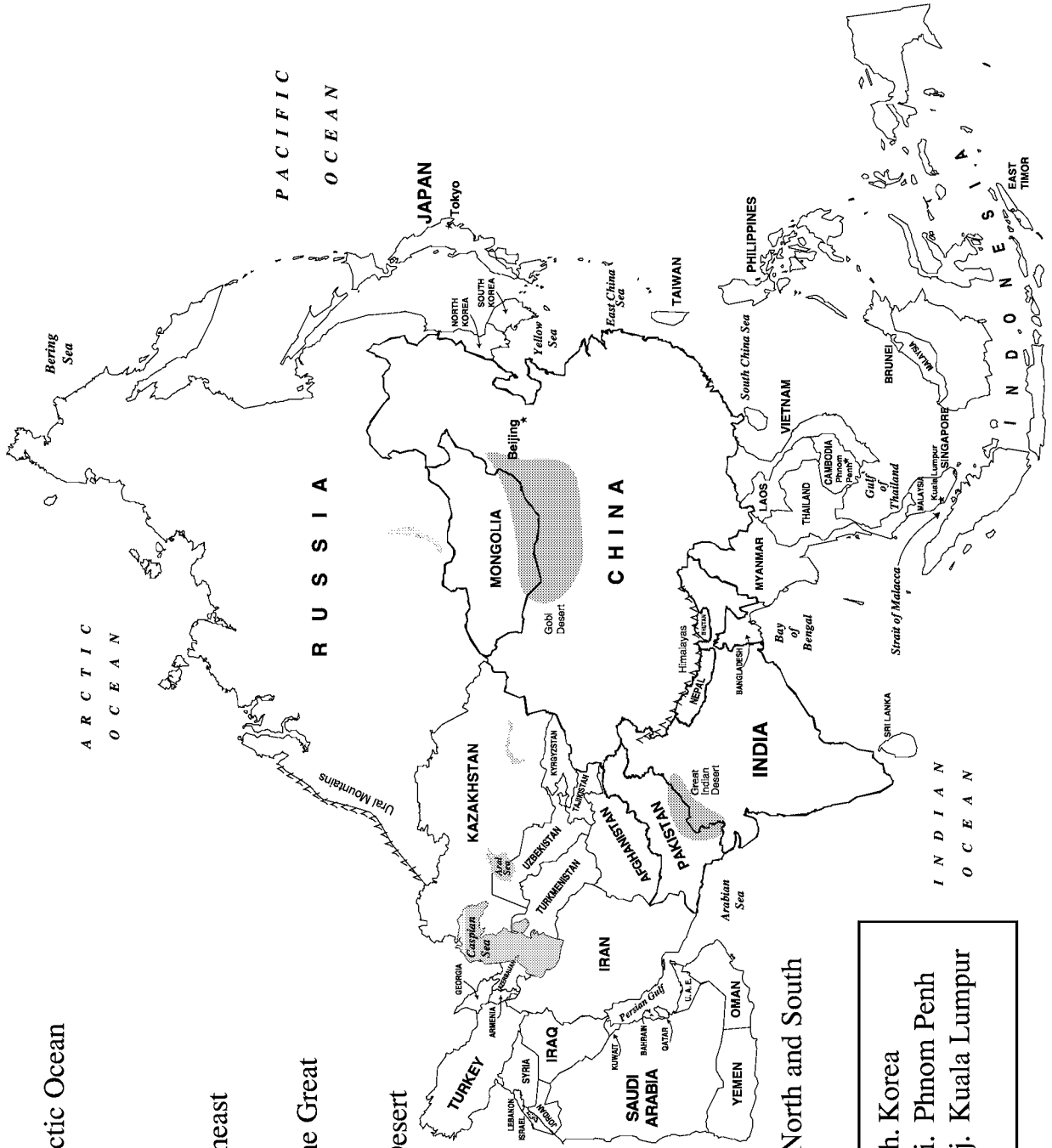
Cities and Countries of Asia	1
Countries of Asia	2
Important Cities of China	3
Features of Asia	4
Crossword Puzzle of Asia	5
The Middle East	6
Features of the Middle East	7
Geography of India and the Indian Subcontinent	8
Countries and Capitals of Africa	9
Major Land and Water Areas of Africa	10
Africa	11
Features of Russia & Proximities	12
Geography of Russia and Proximities	13
Russia and Proximities	14
Countries of Europe	15
The Seas of Europe	16
European Capitals	17
Australia and Oceania	18
Mexico, Central America, and the Caribbean Islands	19
Countries of South America	20
Crossword Puzzle of South America	21
Features of the United States	22
Major Cities of the United States	23
Capitals and Features of the United States	24
Features of Canada	25
Provinces, Territories, and Capitals of Canada	26
Sailing More Than the Seven Seas	27
The Western Hemisphere	28

Cities and Countries of Asia

Choose the word that best fits the description and write its letter on the line.

1. a country bordered by the Arctic Ocean _____
2. the capital of Kampuchea _____
3. the capital of Malaysia _____
4. the island nation off the southeast coast of India _____
5. the country that lies across the Great Indian Desert from. India _____
6. a country sharing the Gobi Desert with northern China _____
7. the capital of China _____
8. an island country southeast of China _____
9. a large island belonging to China that lies off its east coast _____
10. a country bordering the Sea of Japan that is divided into North and South _____

- | | | |
|----------------|-------------|-----------------|
| a. Sri Lanka | e. Taiwan | h. Korea |
| b. Philippines | f. Beijing | i. Phnom Penh |
| c. Mongolia | g. Pakistan | j. Kuala Lumpur |
| d. Russia | | |



Countries of Asia

Study the map. Write the number next to the corresponding country and the letter next to the corresponding city.

- _____ Afghanistan
- _____ Bangladesh
- _____ Bhutan
- _____ Myanmar
- _____ China
- _____ India
- _____ Japan
- _____ Cambodia
- _____ Laos
- _____ Malaysia
- _____ Mongolia
- _____ Nepal
- _____ New Guinea

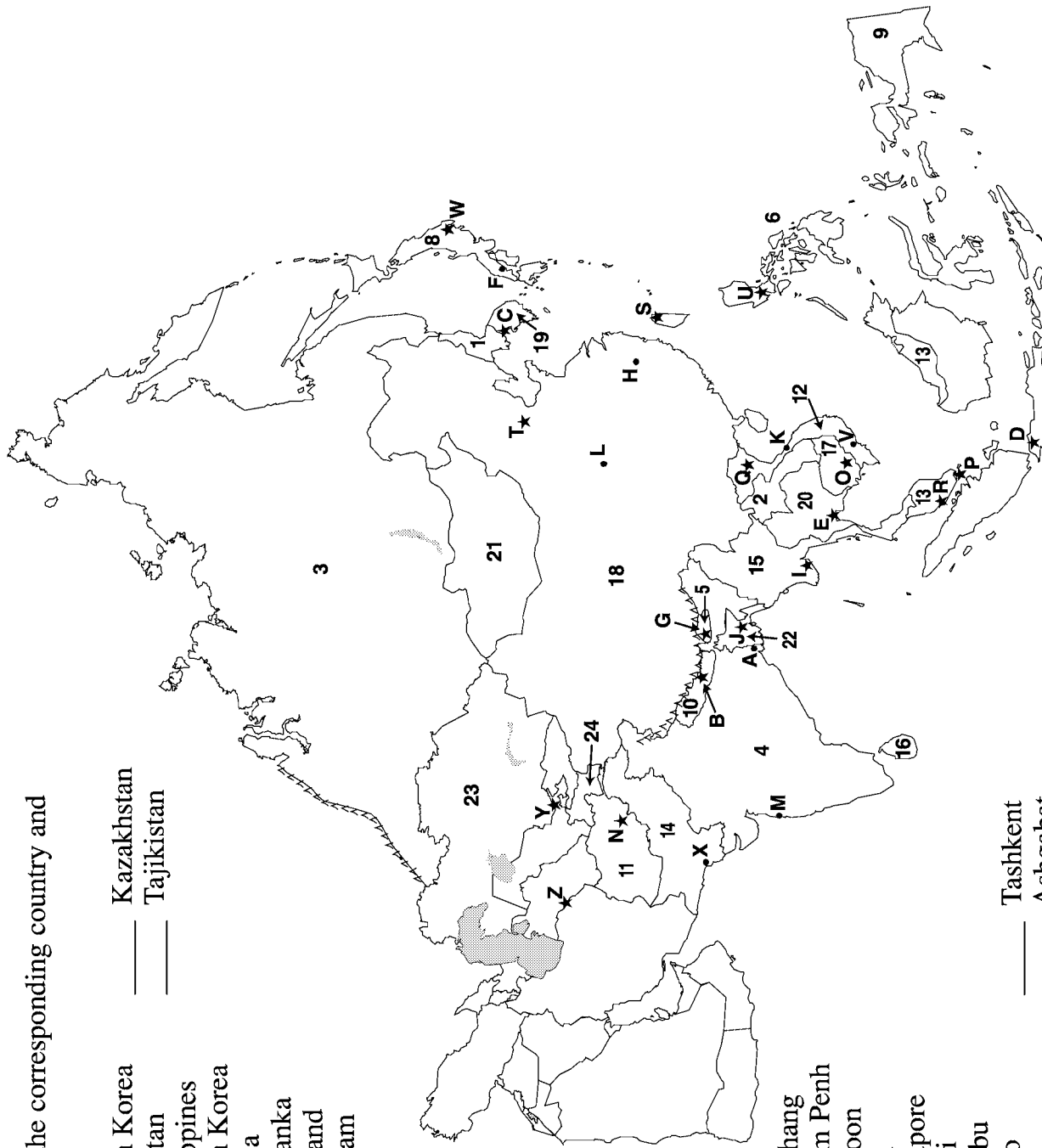
- _____ North Korea
- _____ Pakistan
- _____ Philippines
- _____ South Korea
- _____ Russia
- _____ Sri Lanka
- _____ Thailand
- _____ Vietnam

- _____ Kazakhstan
- _____ Tajikistan

- _____ Bangkok
- _____ Beijing
- _____ Bombay
- _____ Calcutta
- _____ Dhaka
- _____ Hanoi
- _____ Hiroshima
- _____ Ho Chi Minh City
- _____ Hue
- _____ Jakarta
- _____ Kabul
- _____ Karachi
- _____ Kathmandu
- _____ Kuala Lumpur
- _____ Manila

- _____ Nanchang
- _____ Phnom Penh
- _____ Rangoon
- _____ Seoul
- _____ Singapore
- _____ Taipei
- _____ Thimbu
- _____ Tokyo
- _____ Xi'an

- _____ Tashkent
- _____ Ashgabat



Label these bodies of water on the map.

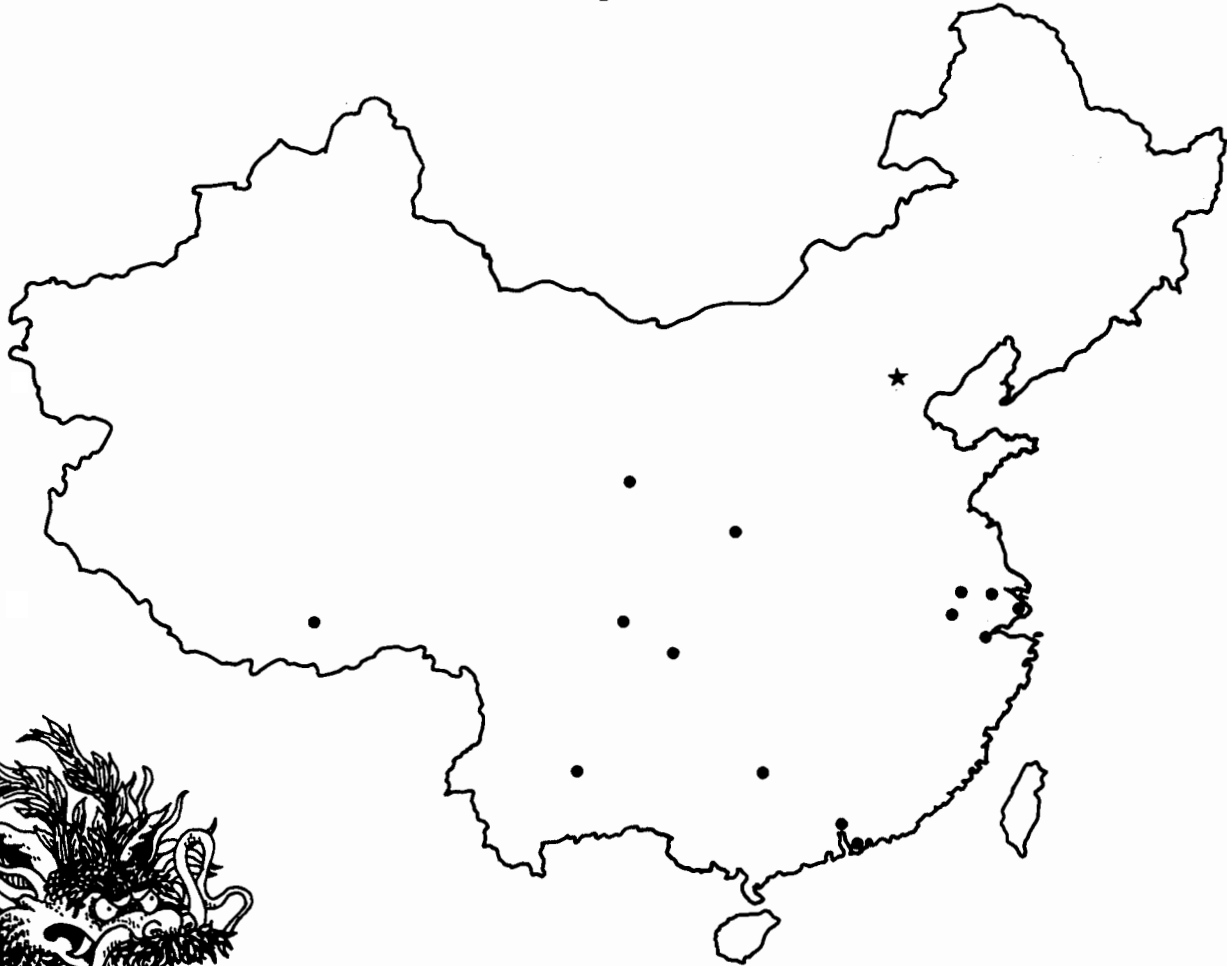
- _____ Arabian Sea
- _____ Bay of Bengal
- _____ Sea of Japan
- _____ Strait of Malacca

- _____ Indian Ocean
- _____ Persian Gulf

- _____ Yellow Sea
- _____ South China Sea
- _____ Pacific Ocean
- _____ Gulf of Thailand

Important Cities of China

Match the scrambled word with the correct spelling of each Chinese city.
Use the numbers to label the cities on the map.



- | | | |
|-------|--------------|--------------|
| _____ | 1. Beijing | a. gnkoohgn |
| _____ | 2. Chengdu | b. niigul |
| _____ | 3. Chongqing | c. haasl |
| _____ | 4. Guangzhou | d. unehcgd |
| _____ | 5. Guilin | e. zounhagh |
| _____ | 6. Hangzhou | f. ihgansah |
| _____ | 7. Hong Kong | g. huuw |
| _____ | 8. Kunming | h. nxai |
| _____ | 9. Lanzhou | i. haloznu |
| _____ | 10. Lhasa | j. giiebjn |
| _____ | 11. Nanjing | k. honniggcq |
| _____ | 12. Shanghai | l. zohugunag |
| _____ | 13. Suzhou | m. uohzsu |
| _____ | 14. Wuhu | n. ginnmuk |
| _____ | 15. Xi'an | o. jgnnnai |

