

Primary Science

Seasons and Living Things 1-3

Contents

The Sun and the Seasons	1
The Earth in Spring	2
The Earth in Summer	3
The Earth in Fall	4
The Earth in Winter	5
Clothing During the Seasons	6
Plants in Spring	7
Plants in Summer	8
Plants in Fall	9
Plants in Winter	10
Plants During the Seasons	11
Weather	12
Animals in Spring	13
Animals in Summer	14
Animals in Fall	15
Animals Get Ready for Winter	16
Animals in Winter	17
The Life of a Bird	18
Migration	19
Hibernation	20
Understanding Animals	21
Activities in Spring	22
Activities in Summer	23
Activities in Fall	24
Activities in Winter	25
The Seasons	26
Animals During the Seasons	27
Awards	28

Authors

Edward Ortleb
Richard Cadice
Nancy McRee

Artist

Don O'Connor

Managing Editor

Kathy M. Hilmes

Other books available in this series include:

Plants and Animals
Earth, Sun, and Stars
Heat, Light, and Sound

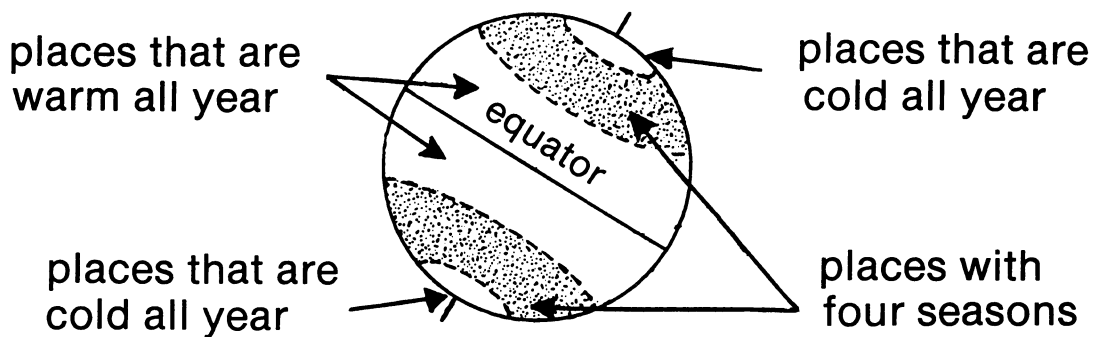
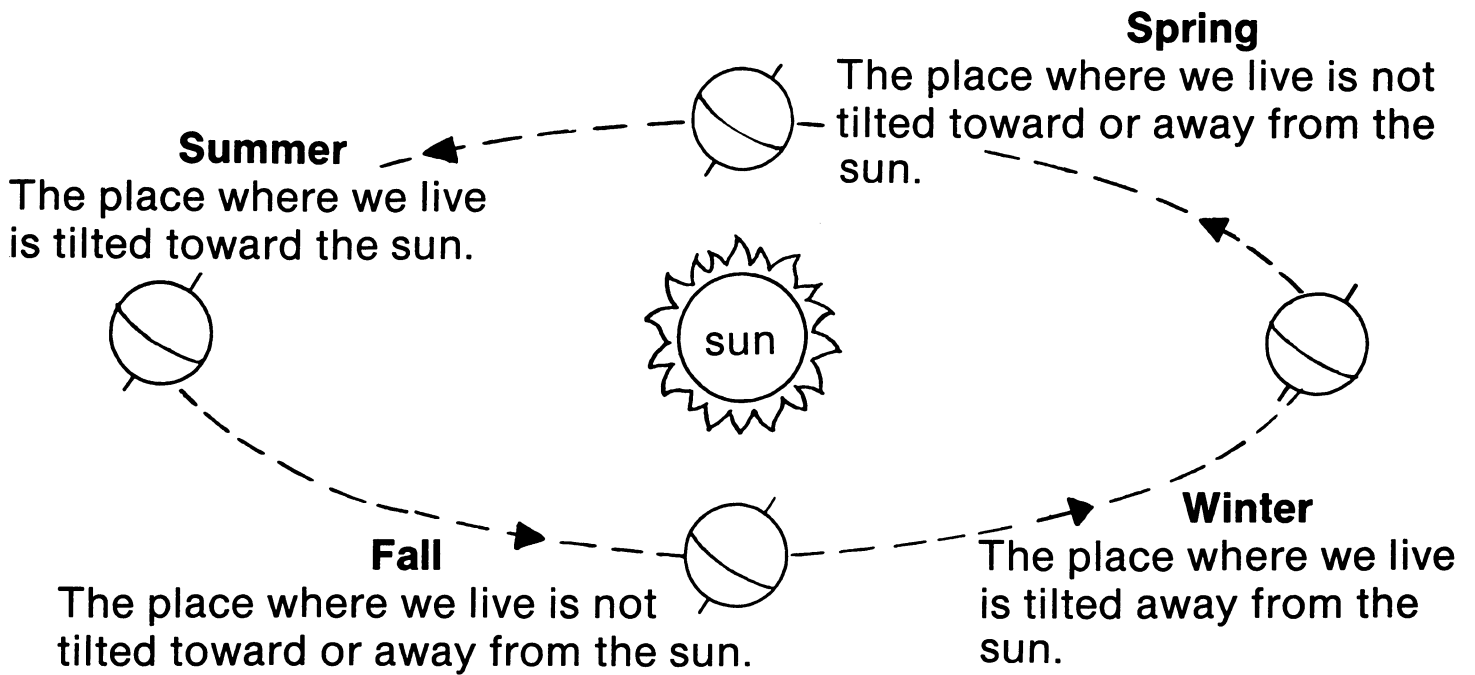
Copyright © 1988
Milliken Publishing Company
a Lorenz company
P.O. Box 802
Dayton, OH 45401-0802
www.LorenzEducationalPress.com

All rights reserved.

EMP3313

The purchase of this book entitles the individual teacher/purchaser to reproduce copies by duplicating master or any photocopy process for single classroom use. The reproduction of any part of this book for use by an entire school or school system or for any commercial use is strictly prohibited.

The Sun and the Seasons



Some places have four seasons, and some do not.

When People Do Things

rake leaves: _____


build a snowman: _____

plant seeds: _____

go swimming: _____

1. In the top picture, draw a circle around the two seasons where the poles of the earth are not tilted either toward or away from the sun.
2. The bottom picture shows a line that divides the earth in half. This line is called the _____.
3. Circle your answer: Every place on earth has four seasons. yes no

The Earth in Spring



The first day of spring
in the Northern Hemisphere
is about March 21.

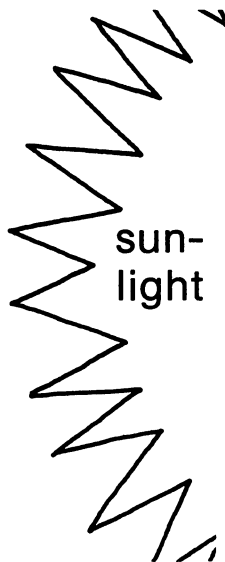
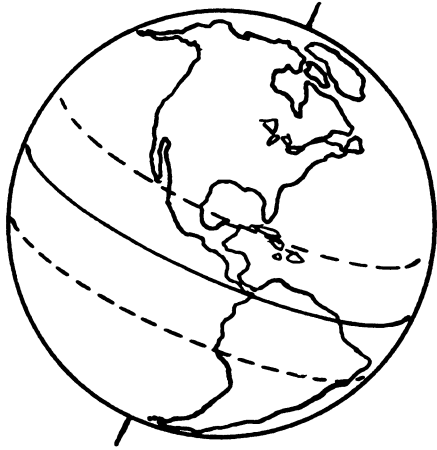
length of day 12 hours
length of night ... 12 hours
temperature about 13° C
(55° F)



A Day in Spring


1. Circle your answer: The first day of spring comes near the beginning of the year. yes no
2. Draw a red circle around the number of hours in the day and in the night. Are they the same? yes no
3. Write the missing word: In spring, many trees have _____ (grass, buds, paper).
4. Color the bottom picture.

The Earth in Summer



The first day of summer
in the Northern Hemisphere
is about June 22.

length of day $14\frac{1}{2}$ hours
length of night ... $9\frac{1}{2}$ hours
temperature about 27° C
(80° F)



A Day in Summer

1. Circle your answer: Summer has more day hours than night hours.
yes no
2. Draw a red circle around the temperature in summer.
Is this temperature warm or cold? _____
3. In the summer, the trees are covered with _____
(snow, grass, leaves).
4. Color the bottom picture.