




# Concepts

Counting and Writing Numbers 1–10 .....	1–4
Ordinal Numbers .....	5–7
Counting and Writing Tens and Ones .....	8–14
Order of Numbers to 100 .....	15–23
Less Than, Greater Than .....	24
Counting by 10s to 100 .....	25
Ten More Than, Ten Less Than .....	26
Comparing Numbers to 100 .....	27
Counting by 2s .....	28–29
Counting by 2s and 5s .....	30
Counting by 5s .....	31
Counting by 3s .....	32
Counting by 2s, 3s, 5s, and Tens .....	33
Comparing Numbers Using $>$ and $<$ .....	34–37
Number Patterns .....	38–41
Counting with Money .....	42–44
Answer Key .....	45–48





Name \_\_\_\_\_

# Counting and Writing Numbers 1-10

Count each set. Write the numeral. Match the numeral to the number word.

	9	two
	_____	three
	_____	nine
	_____	six
	_____	one
	_____	four
	_____	eight
	_____	five
	_____	seven
	_____	ten

Write the numerals in order from 1 to 10.

\_\_\_\_\_

\_\_\_\_\_






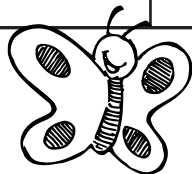
Name \_\_\_\_\_

# Counting and Writing Numbers 1-10



Write the missing numerals.

1	2	3	4	5	6	7	8	9
1	2		4		6	7		9
	2	3	4	5		7	8	
1		3		5	6			9
1			4	5			8	







Name \_\_\_\_\_

# Counting and Writing Numbers 1-10


Count each set. Write the numeral and number word.




\_\_\_\_\_



\_\_\_\_\_




\_\_\_\_\_



\_\_\_\_\_



\_\_\_\_\_




\_\_\_\_\_



\_\_\_\_\_



\_\_\_\_\_



\_\_\_\_\_