




Concepts

Tens and Ones	1–6
Hundreds, Tens, and Ones	7–8, 12–15
Hundreds, Tens, and Ones: Money.....	9–11
Thousands, Hundreds, Tens, and Ones	16–23, 25, 26
Review.....	24
Rounding Numbers	27–28, 37
Millions, Thousands, Hundreds, Tens, and Ones.....	29–35
Least to Greatest, Greatest to Least.....	36
More Than, Less Than	38, 39
From Least to Greatest	40
Roman Numerals	41, 42
Review.....	43
Answer Key	44–46



Name _____

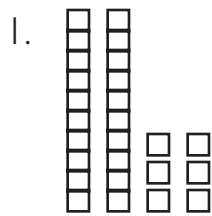
Tens and Ones

The blocks are in stacks of ten. Count the stacks. Then count the single blocks. Record. Follow the example.

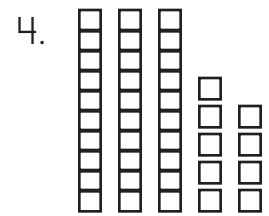
Remember: The decimal place value system is based on the number ten.

	<table border="1" style="margin: auto;"> <thead> <tr> <th colspan="2">Table Form</th> </tr> <tr> <th>Tens</th> <th>Ones</th> </tr> </thead> <tbody> <tr> <td style="text-align: center;">3</td> <td style="text-align: center;">5</td> </tr> </tbody> </table>	Table Form		Tens	Ones	3	5	<p>Expanded Form</p> $30 + 5$	<p>Standard Form</p> 35	<p>Number Name</p> <p>thirty-five</p>
Table Form										
Tens	Ones									
3	5									
	<table border="1" style="margin: auto;"> <thead> <tr> <th colspan="2">Table Form</th> </tr> <tr> <th>Tens</th> <th>Ones</th> </tr> </thead> <tbody> <tr> <td style="text-align: center;">2</td> <td style="text-align: center;">7</td> </tr> </tbody> </table>	Table Form		Tens	Ones	2	7	<p>Expanded Form</p> $20 + 7$	<p>Standard Form</p> 27	<p>Number Name</p> <p>_____</p>
Table Form										
Tens	Ones									
2	7									


Match each set with the standard numeral.



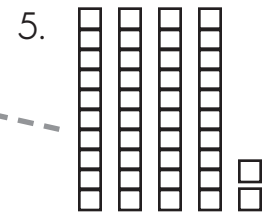
39 I



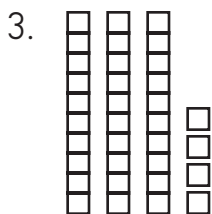
26 U



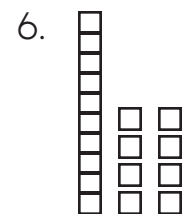
42 P



18 T



34 L



53 S

Put the letter above the number.
What flowers have the same name as a part of your body?

18
26
34
39
42
53



Tens and Ones

Write the expanded form for each number.

Example: 4 tens and 6 ones = 40 + 6 = 46.

1. 8 tens and 6 ones = _____ + _____ = _____.

2. 3 tens and 2 ones = _____ + _____ = _____.

3. 9 tens and 1 one = _____ + _____ = _____.



4. 7 tens and 4 ones = _____ + _____ = _____.

5. 2 tens and 3 ones = _____ + _____ = _____.

6. 6 tens and 9 ones = _____ + _____ = _____.

7. 5 tens and 8 ones = _____ + _____ = _____.

8. 1 ten and 7 ones = _____ + _____ = _____.



Fill in the answers.

9. 95 means _____ tens and _____ ones.

10. 62 means _____ tens and _____ ones.

11. 21 means _____ tens and _____ ones.

12. 54 means _____ tens and _____ ones.

13. 43 means _____ tens and _____ ones.

14. 39 means _____ tens and _____ ones.

15. 68 means _____ tens and _____ ones.

16. 87 means _____ tens and _____ ones.

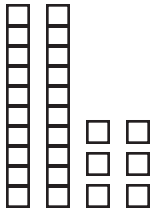
17. 40 means _____ tens and _____ ones.



Name _____

Tens and Ones

Write the answers.

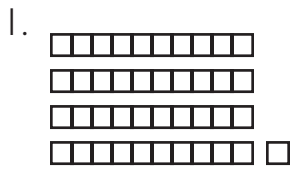


Tens	Ones
2	6

Expanded Form

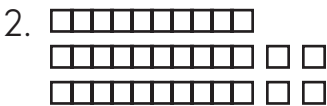
20 +

Standard Form




Tens	Ones
4	1

40 +




Tens	Ones
3	4

+




Tens	Ones
<input type="text"/>	<input type="text"/>

+



Tens	Ones
<input type="text"/>	<input type="text"/>

+



Tens	Ones
<input type="text"/>	<input type="text"/>

+