


Table of Contents

One to Twenty— <i>Number review: 1–20</i>	1
On the Go— <i>Number sequence: 1–20</i>	2
How Many?— <i>Counting review: 1–20</i>	3
Dot to Dot— <i>Number sequence review: 1–20</i>	4
Sailing, Sailing— <i>Relationship of numbers to objects</i>	5
Around and Around— <i>Recognize/Draw circles</i>	6
Four Equal Sides— <i>Recognize/Draw squares</i>	7
Juggling Act— <i>Recognize/Draw triangles</i>	8
What Comes Next?— <i>Shape patterns</i>	9
Long, Long Ago— <i>Color patterns</i>	10
Patterns You Can Create— <i>Create geometric patterns</i>	11
One, Two, Three— <i>Number words to ten</i>	12
What Doesn't Belong?— <i>Classifying</i>	13
How Many in All?— <i>Addition: Sums to 10</i>	14
Ways to Make 10— <i>Sums equal to 10</i>	15
First, Second, Third— <i>Ordinal numbers</i>	16
Keep on Truckin'— <i>Addition: Sums to 12</i>	17
One Dozen = 12— <i>Sums equal to 12</i>	18
How Many Left?— <i>Subtraction</i>	19
At the Store— <i>Addition: Sums to 15</i>	20
To the Moon . . . And Beyond— <i>Subtraction</i>	21
Graph It— <i>Graphing</i>	22
Circle the Sets— <i>Grouping</i>	23
Choo, Choo, Choo— <i>3-Digit addition: Sums to 10</i>	24
Up, Up, and Away— <i>Addition fact families: Sums to 15</i>	25
Row, Row, Row Your Boat— <i>Commutative Property of Addition/Subtraction</i> . . .	26
Fraction Trucks— <i>Fractions: halves, thirds, fourths</i>	27
How Much Is It Worth?— <i>Money to 25 cents</i>	28
Compare and Circle— <i>Comparisons</i>	29
Up to 100	30

Name _____

One to Twenty

Color, trace, and write each number.



1 _____

2 _____

3 _____

4 _____

5 _____

6 _____

7 _____

8 _____

9 _____

10 _____

11 _____

12 _____

13 _____

14 _____

15 _____

16 _____

17 _____

18 _____

19 _____

20 _____





Name _____




On the Go

Finish the number pattern in each row.



Color the pictures.





Vehicles:

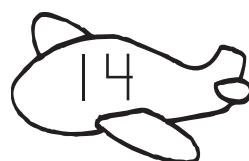














Name _____

How Many?


Count. Write the numbers.



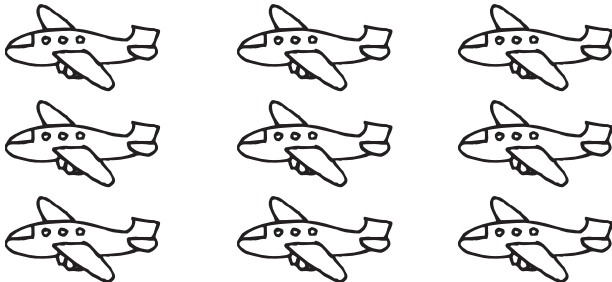
How many? _____



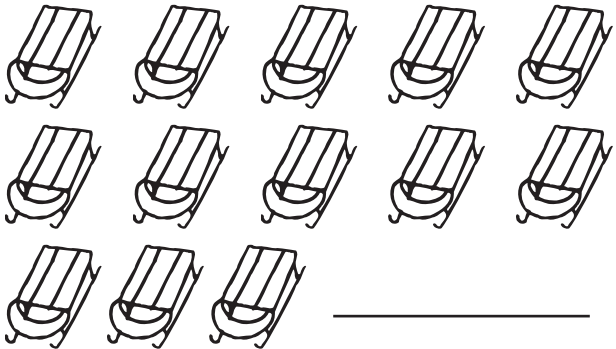
How many? _____




How many? _____



How many? _____



How many? _____



How many? _____