

# Fractions

## Grades 1–2

### Contents

Whole and Partial Regions.....	1	Writing Fractions ( $1/2$ , $1/3$ , and $2/3$ ) .....	24
Two Equal Parts.....	2	Learning One-Fourth .....	25–27
Three and Four Equal Parts.....	3	Writing Fractions ( $1/2$ , $1/3$ , $2/3$ , and $1/4$ ) .....	28
Identifying Two Through Four Equal Parts .....	4	Identifying Equal Sets ( <i>Four Parts</i> ) .....	29–32
Learning One-Half .....	5–7	Review: Sets of Two, Three, and Four.....	33
Identifying Equal Sets ( <i>Two Parts</i> ).....	8–10	Writing Fractions ( $1/2$ , $1/3$ , $2/3$ , and $1/4$ ) .....	34,35
One-Half of a Whole Number.....	11	Learning Two-Fourths .....	36,37
Learning One-Third.....	12–14	Learning Three-Fourths.....	38,39
Writing Fractions ( $1/2$ and $1/3$ ) .....	15	Writing Fractions ( $1/2$ , $1/3$ , $2/3$ , $1/4$ , $2/4$ , and $3/4$ ).....	40,41
Identifying Equal Sets ( <i>Three Parts</i> ) .....	16–18	Dividing Sets ( $1/2$ , $1/3$ , $2/3$ , $1/4$ , $2/4$ , and $3/4$ ).....	42,43
Review: Sets of Two and Three .....	19	Solve the Code with Fractions.....	44
Learning Two-Thirds .....	20–22		
Review: One-Half, One-Third, and Two-Thirds .....	23		



Permission to photocopy the student activities in this book is hereby granted to one teacher as part of the purchase price. This permission may only be used to provide copies for this teacher's specific classroom setting. This permission may not be transferred, sold, or given to any additional or subsequent user of this product. Thank you for respecting copyright laws.

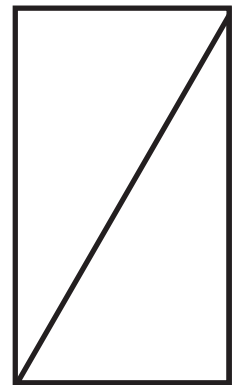
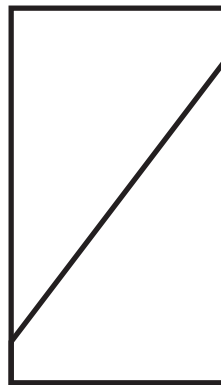
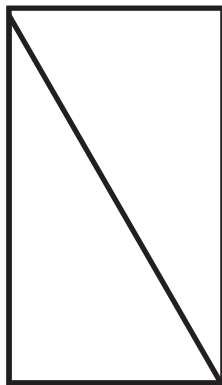



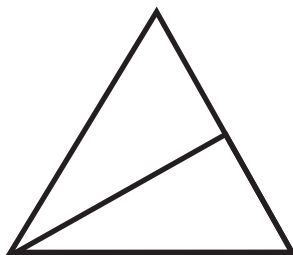
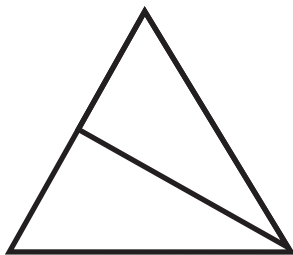


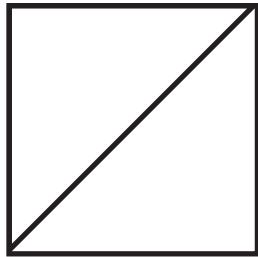

**Written by** Sally Fisk and Lynne Aldrich  
**Production/Designed by** Gayle Van Dyke  
**Cover Design by** Jeff Richards

**ISBN** 978-0-7877-0074-4  
All rights reserved.

Copyright ©1996  
**Milliken Publishing Company**  
a Lorenz company  
P.O. Box 802  
Dayton, OH 45401-0802  
[www.LorenzEducationalPress.com](http://www.LorenzEducationalPress.com)

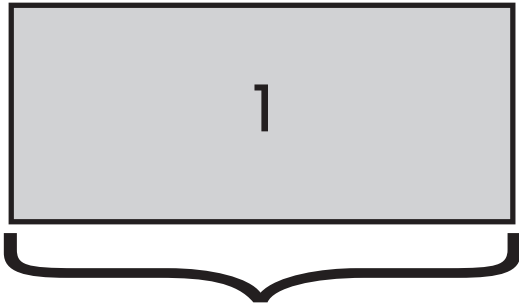
# START WITH EQUAL PARTS.

Equal parts are the same size and the same shape. These regions have **TWO EQUAL PARTS**. Color each part the same color to make **ONE WHOLE REGION**.

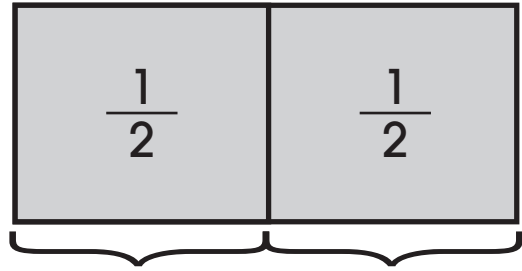


A circle can be divided into two equal parts an infinite number of ways. **INFINITE** means many, many, many ways.

# UNDERSTANDING FRACTIONS.



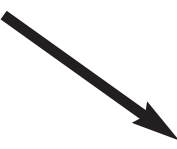
one




one-half one-half



is half of


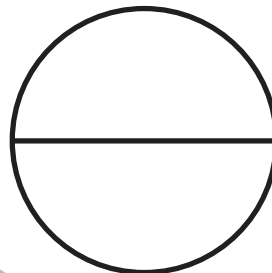

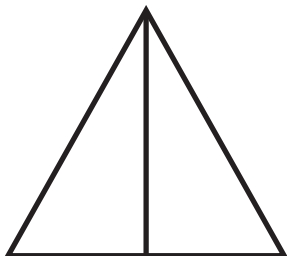
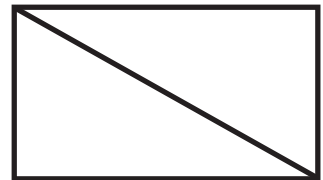
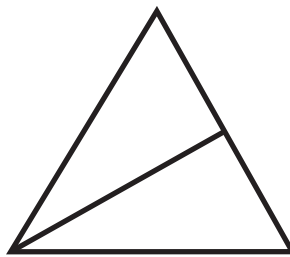




is half of




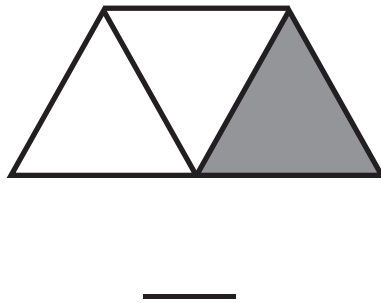
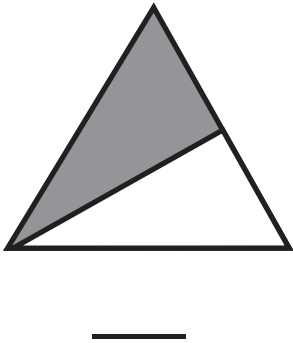
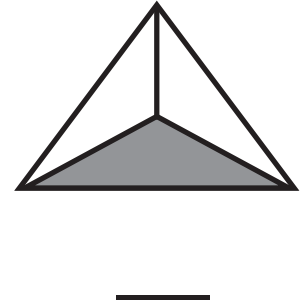

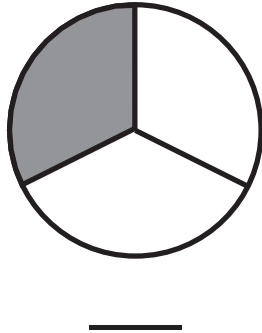
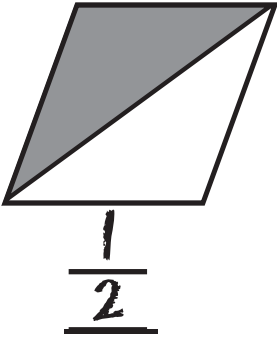
Read  $\frac{1}{2}$  as "one-half."

Color  $\frac{1}{2}$  of each region.








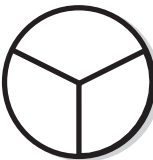
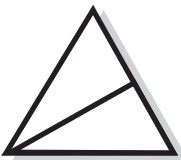


# FRACTION FUN!

Write the fraction to show the part shaded in each region.



Let's play tic-tac-toe!

Mark the row that has three regions divided into either **halves** or **thirds**.

1 	2 	3 
4 	5 	6 
7 	8 	9 

The winning row is: \_\_\_\_\_, \_\_\_\_\_, \_\_\_\_\_.