

Math Olympics Big Book – Table of Contents

Math Olympics – Grades 4-6 3

About This Resource:

Give your students the necessary materials to run a math competition with a single classroom or multiple classrooms taking part. It also enables you to choose school teams for external competitions. As well, the two sets of questions in each book can be used during regular math class as a fun activity. Included in this unit are the following: teacher information, instructions, practise question sets, level 2 question sets, marking sheets and certificates. The unit is recommended for Grades 4 to 6. This level 2 math competition will engage students while promoting a healthy competition between peers. This Math lesson provides a teacher information section and a student section with a variety of worksheets creating a well-rounded lesson plan.

Math Olympics – Grades 5-7 65

About This Resource:

Give your students the necessary materials to run a math competition with a single classroom or multiple classrooms taking part. It also enables you to choose school teams for external competitions. As well, the two sets of questions in each book can be used during regular math class as a fun activity. Included in this unit are the following: teacher information, instructions, practise question sets, level 3 question sets, marking sheets and certificates. The unit is recommended for Grades 5 to 7. This level 3 math competition will engage students while promoting a healthy competition between peers. This Math lesson provides a teacher information section and a student section with a variety of worksheets creating a well-rounded lesson plan.

Math Olympics – Grades 6-8 125

About This Resource:

Give your students the necessary materials to run a math competition with a single classroom or multiple classrooms taking part. It also enables you to choose school teams for external competitions. As well, the two sets of questions in each book can be used during regular math class as a fun activity. Included in this unit are the following: teacher information, instructions, practise question sets, level 4 question sets, marking sheets and certificates. The unit is recommended for Grades 6 to 8. This level 4 math competition will engage students while promoting a healthy competition between peers. This Math lesson provides a teacher information section and a student section with a variety of worksheets

Let's Compete

SET A Level 2 : Practice Question

Practice Question
Rusco has \$4.00 to buy popsicles.
What is the greatest number he can buy?



ANSWER

Practice Question
Rusco has \$4.00 to buy popsicles.
What is the greatest number he can buy?



ANSWER

Practice Question
Rusco has \$4.00 to buy popsicles.
What is the greatest number he can buy?



ANSWER

Practice Question
Rusco has \$4.00 to buy popsicles.
What is the greatest number he can buy?



ANSWER

Practice Question
Rusco has \$4.00 to buy popsicles.
What is the greatest number he can buy?



ANSWER

Practice Question
Rusco has \$4.00 to buy popsicles.
What is the greatest number he can buy?



ANSWER

Let's Compete

SET A Level 2 : Question 14

14a. Megan and Kelly went to a movie that started at 2:30pm and finished at 4:15pm. The movie had a 15 min intermission in the middle. How long was the actual movie?



ANSWER

14a. Megan and Kelly went to a movie that started at 2:30pm and finished at 4:15pm. The movie had a 15 min intermission in the middle. How long was the actual movie?



ANSWER

14a. Megan and Kelly went to a movie that started at 2:30pm and finished at 4:15pm. The movie had a 15 min intermission in the middle. How long was the actual movie?



ANSWER

14a. Megan and Kelly went to a movie that started at 2:30pm and finished at 4:15pm. The movie had a 15 min intermission in the middle. How long was the actual movie?



ANSWER

14a. Megan and Kelly went to a movie that started at 2:30pm and finished at 4:15pm. The movie had a 15 min intermission in the middle. How long was the actual movie?



ANSWER

14a. Megan and Kelly went to a movie that started at 2:30pm and finished at 4:15pm. The movie had a 15 min intermission in the middle. How long was the actual movie?



ANSWER

Let's Compete

SET B Level 2 : Question 15

15b. 1 scoop of drink powder makes 1L of drink. How many scoops will be needed to make enough juice for 28 children to have 1 cup each? (1cup = 250ml)



ANSWER

15b. 1 scoop of drink powder makes 1L of drink. How many scoops will be needed to make enough juice for 28 children to have 1 cup each? (1cup = 250ml)



ANSWER

15b. 1 scoop of drink powder makes 1L of drink. How many scoops will be needed to make enough juice for 28 children to have 1 cup each? (1cup = 250ml)



ANSWER

15b. 1 scoop of drink powder makes 1L of drink. How many scoops will be needed to make enough juice for 28 children to have 1 cup each? (1cup = 250ml)



ANSWER

15b. 1 scoop of drink powder makes 1L of drink. How many scoops will be needed to make enough juice for 28 children to have 1 cup each? (1cup = 250ml)



ANSWER

15b. 1 scoop of drink powder makes 1L of drink. How many scoops will be needed to make enough juice for 28 children to have 1 cup each? (1cup = 250ml)



ANSWER

SET A Level 3 : Question 10

10a. Aimee entered a diving competition. Here are the scores for her 6 dives:
5 6 7 4 6 8
Work out Aimee's average score.



ANSWER

10a. Aimee entered a diving competition. Here are the scores for her 6 dives:
5 6 7 4 6 8
Work out Aimee's average score.



ANSWER

10a. Aimee entered a diving competition. Here are the scores for her 6 dives:
5 6 7 4 6 8
Work out Aimee's average score.



ANSWER

10a. Aimee entered a diving competition. Here are the scores for her 6 dives:
5 6 7 4 6 8
Work out Aimee's average score.



ANSWER

10a. Aimee entered a diving competition. Here are the scores for her 6 dives:
5 6 7 4 6 8
Work out Aimee's average score.



ANSWER


10a. Aimee entered a diving competition. Here are the scores for her 6 dives:
5 6 7 4 6 8
Work out Aimee's average score.



ANSWER


SET A Level 3 : Question 21

21a. At 7am the thermometer in the glass house reads 6.8° . At 1pm it reads 21.3° . By how many degrees has it risen during the day?




ANSWER

21a. At 7am the thermometer in the glass house reads 6.8° . At 1pm it reads 21.3° . By how many degrees has it risen during the day?




ANSWER

21a. At 7am the thermometer in the glass house reads 6.8° . At 1pm it reads 21.3° . By how many degrees has it risen during the day?




ANSWER

21a. At 7am the thermometer in the glass house reads 6.8° . At 1pm it reads 21.3° . By how many degrees has it risen during the day?




ANSWER

21a. At 7am the thermometer in the glass house reads 6.8° . At 1pm it reads 21.3° . By how many degrees has it risen during the day?



ANSWER


21a. At 7am the thermometer in the glass house reads 6.8° . At 1pm it reads 21.3° . By how many degrees has it risen during the day?



ANSWER


SET B Level 3 : Question 15

15b. Anthony collects postcards from around the world. He has 250 postcards altogether. If 40% are national ones, what number of postcards are international?




ANSWER

15b. Anthony collects postcards from around the world. He has 250 postcards altogether. If 40% are national ones, what number of postcards are international?




ANSWER

15b. Anthony collects postcards from around the world. He has 250 postcards altogether. If 40% are national ones, what number of postcards are international?




ANSWER

15b. Anthony collects postcards from around the world. He has 250 postcards altogether. If 40% are national ones, what number of postcards are international?




ANSWER

15b. Anthony collects postcards from around the world. He has 250 postcards altogether. If 40% are national ones, what number of postcards are international?



ANSWER


15b. Anthony collects postcards from around the world. He has 250 postcards altogether. If 40% are national ones, what number of postcards are international?



ANSWER


SET A Level 4 : Practice Question

Practice
Mandy used 6 pieces of 75cm long wool to make a plait. This used up $\frac{1}{4}$ of a ball of wool. How many metres of wool was left on the ball?




ANSWER

Practice
Mandy used 6 pieces of 75cm long wool to make a plait. This used up $\frac{1}{4}$ of a ball of wool. How many metres of wool was left on the ball?




ANSWER

Practice
Mandy used 6 pieces of 75cm long wool to make a plait. This used up $\frac{1}{4}$ of a ball of wool. How many metres of wool was left on the ball?




ANSWER

Practice
Mandy used 6 pieces of 75cm long wool to make a plait. This used up $\frac{1}{4}$ of a ball of wool. How many metres of wool was left on the ball?




ANSWER

Practice
Mandy used 6 pieces of 75cm long wool to make a plait. This used up $\frac{1}{4}$ of a ball of wool. How many metres of wool was left on the ball?



ANSWER


Practice
Mandy used 6 pieces of 75cm long wool to make a plait. This used up $\frac{1}{4}$ of a ball of wool. How many metres of wool was left on the ball?



ANSWER

SET A Level 4 : Question 24

24a. What 3 numbers that add to 10 have the greatest answer when multiplied together?



ANSWER

24a. What 3 numbers that add to 10 have the greatest answer when multiplied together?



ANSWER

24a. What 3 numbers that add to 10 have the greatest answer when multiplied together?




ANSWER

24a. What 3 numbers that add to 10 have the greatest answer when multiplied together?




ANSWER

24a. What 3 numbers that add to 10 have the greatest answer when multiplied together?



ANSWER


24a. What 3 numbers that add to 10 have the greatest answer when multiplied together?



ANSWER


SET B *Level 4 : Question 25*

25b. Philip has a penpal called Alan. It costs 48¢/minute for Philip to phone Alan but no more than \$6 for the entire call. After how many minutes does Philip pay just \$6 for his call?




ANSWER

25b. Philip has a penpal called Alan. It costs 48¢/minute for Philip to phone Alan but no more than \$6 for the entire call. After how many minutes does Philip pay just \$6 for his call?




ANSWER

25b. Philip has a penpal called Alan. It costs 48¢/minute for Philip to phone Alan but no more than \$6 for the entire call. After how many minutes does Philip pay just \$6 for his call?




ANSWER

25b. Philip has a penpal called Alan. It costs 48¢/minute for Philip to phone Alan but no more than \$6 for the entire call. After how many minutes does Philip pay just \$6 for his call?




ANSWER

25b. Philip has a penpal called Alan. It costs 48¢/minute for Philip to phone Alan but no more than \$6 for the entire call. After how many minutes does Philip pay just \$6 for his call?



ANSWER

25b. Philip has a penpal called Alan. It costs 48¢/minute for Philip to phone Alan but no more than \$6 for the entire call. After how many minutes does Philip pay just \$6 for his call?



ANSWER

SET B *Level 4 : Marking Sheet*

Question. \$17.50	NAME	NAME	NAME
ANSWER			
458, 459, 460			
\$9.00			
90¢			
10:30am Thursday			
7½ or 7.5			
Tortoise (by 1 min)			
8			
10			
6/9, 4/6 and 2/3			
25%			
1:30			
\$400			
3000			
25%			
1hr 24mins or 84mins			
10			
\$40			
50			
\$15 discount - saves \$2			
6			
74			
56			
2, 2, and 6			
2½ (or 12mins 30s)			
SCORES			

ANSWER KEY