




1



## My Height

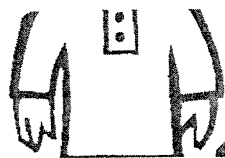
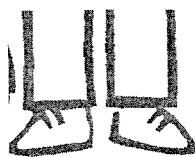
Cut a strip of paper to the same height as yourself.


Use the paper to find:

- 3 things smaller than you
- 3 things taller than you
- 2 things about the same height as you.

Record your results in your book.

Add your height to the class graph.





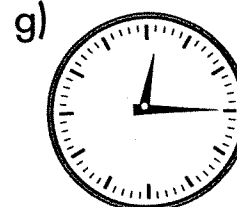

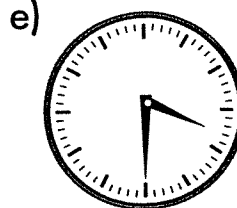

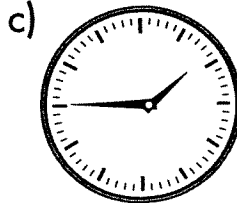
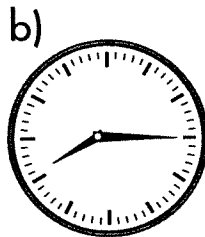
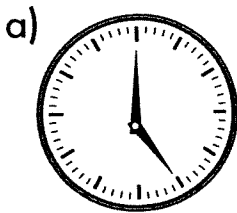
7



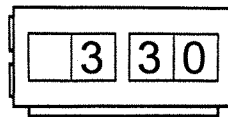
# Matchmaker

Match the analogue and digital clocks with their times.

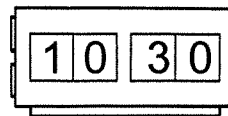
Record your work in your Math book.



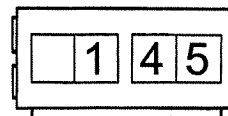
2.



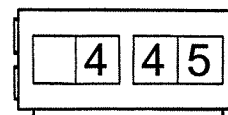
4.



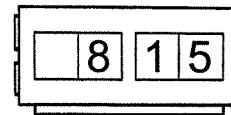
6.



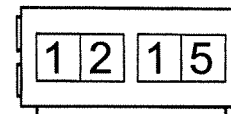
8.



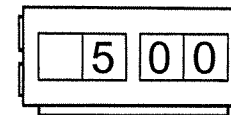
1.



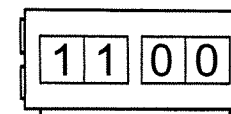
3.

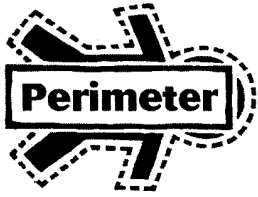


5.




7.





14



## Squares are Fun!

Each square on the grid is 1 cm long.

Find the numbers of centimeters around each shape.

Find the perimeter of the funny dog shape.

Draw some shapes on graph paper and ask a friend to find the perimeter of each shape.

